

# Colouring Fractions Accurately

Name: \_\_\_\_\_

Date: \_\_\_\_\_

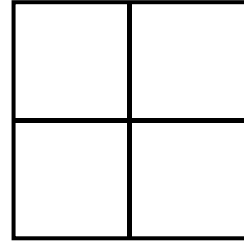
---

**Instructions:** Colour the correct number of parts in each shape to show the fraction.


**1. Colour  $\frac{1}{2}$**



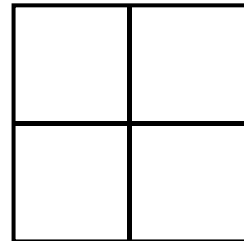
**2. Colour  $\frac{1}{4}$**



**3. Colour  $\frac{2}{3}$**



**4. Colour  $\frac{3}{4}$**



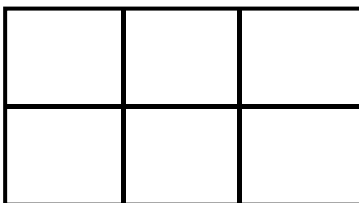
**5. Colour  $\frac{2}{4}$**



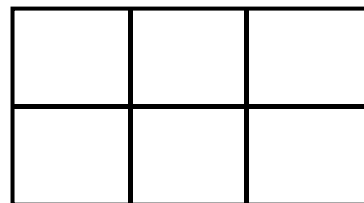
**6. Colour  $\frac{1}{3}$**



**7. Colour  $\frac{5}{6}$**



**8. Colour  $\frac{3}{6}$**



**Challenge:** Can you see any fractions above that are equal to each other? ★